

# What Did the Scout Say After Fixing the Little Old Lady's Bicycle Horn?



For each exercise, draw a line through the two given points. Find the slope of this line. Write the letter of the exercise in the box containing the slope.

**A** (1, 1)  
(4, 3)

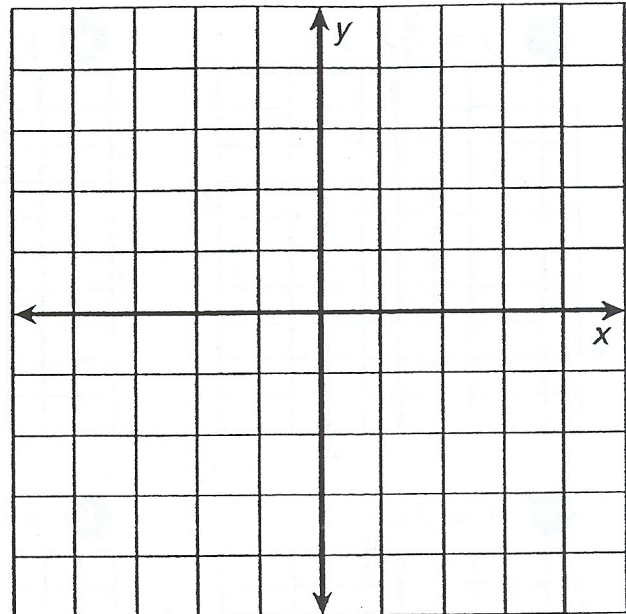
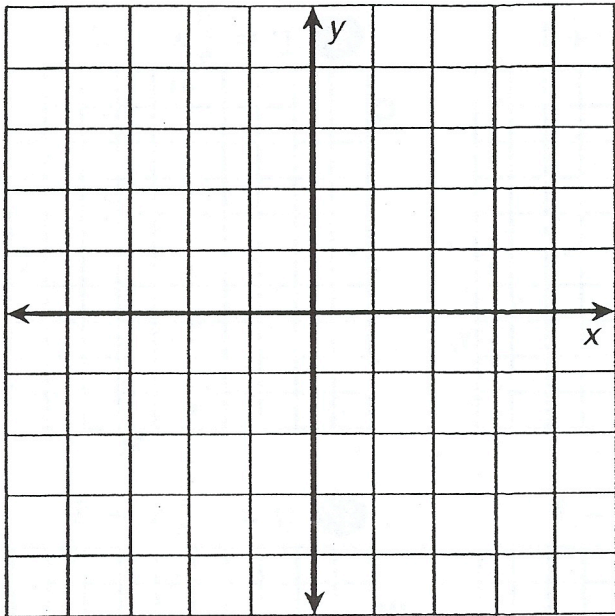
**E** (-1, 2)  
(-4, 4)

**D** (-2, -5)  
(2, -3)

**I** (-4, -3)  
(-1, 3)

**E** (1, 0)  
(3, -4)

**P** (2, 4)  
(0, -3)



**E** (4, -5)  
(-1, -2)

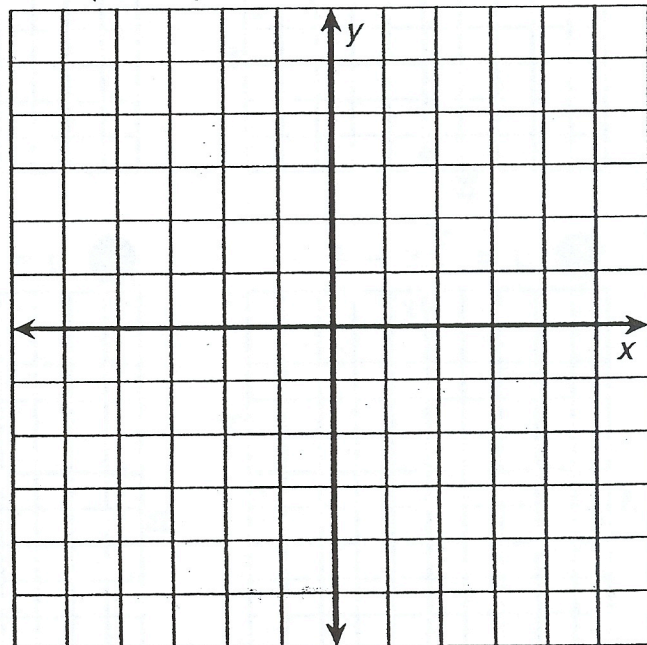
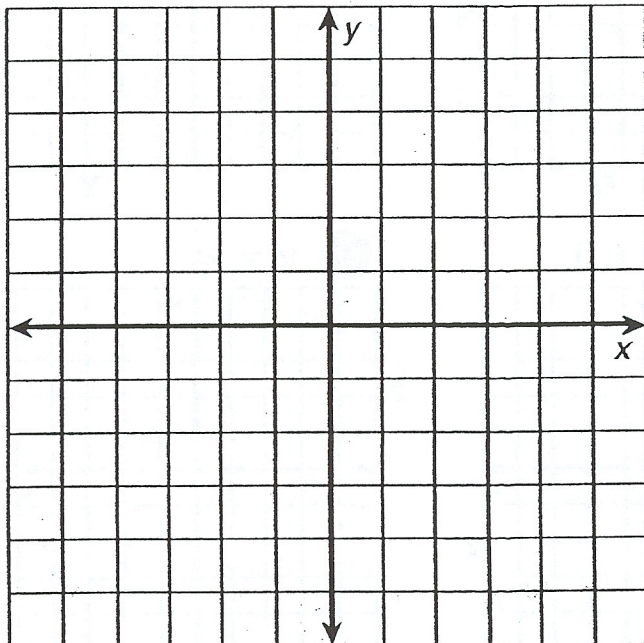
**B** (-6, -6)  
(3, 6)

**R** (0, 2)  
(5, -3)

**E** (-6, 4)  
(-3, -5)

**P** (-3, 0)  
(3, 1)

**R** (-2, -4)  
(5, -4)



- |               |               |    |                |               |                |    |    |               |               |   |   |                |               |                |
|---------------|---------------|----|----------------|---------------|----------------|----|----|---------------|---------------|---|---|----------------|---------------|----------------|
| $\frac{2}{5}$ | $\frac{4}{3}$ | -3 | $-\frac{2}{3}$ | $\frac{7}{2}$ | $-\frac{5}{2}$ | -1 | -2 | $\frac{1}{6}$ | $\frac{2}{3}$ | 2 | 0 | $-\frac{3}{5}$ | $\frac{1}{2}$ | $-\frac{1}{4}$ |
|---------------|---------------|----|----------------|---------------|----------------|----|----|---------------|---------------|---|---|----------------|---------------|----------------|

